

A Story of Units[®]

Eureka Math[™]

Grade 2 Module 1

Student File_B

Additional Student Materials

This file contains:

- G2-M1 Sprint and Fluency Resources¹
- G2-M1 Exit Tickets
- G2-M1 End-of-Module Assessment

¹Note that not all lessons in this module include sprint or fluency resources.

Published by the non-profit GREAT MINDS[®].

Copyright © 2015 Great Minds. No part of this work may be reproduced, sold, or commercialized, in whole or in part, without written permission from Great Minds. Non-commercial use is licensed pursuant to a Creative Commons Attribution-NonCommercial-ShareAlike 4.0 license; for more information, go to <http://greatminds.net/maps/math/copyright>. “Great Minds” and “Eureka Math” are registered trademarks of Great Minds.

Printed in the U.S.A.

This book may be purchased from the publisher at eureka-math.org


10 9 8 7 6 5 4 3 2

G2-M1-SFB-1.3.1-05.2015

Sprint and Fluency Packet

A

Number Correct:



Name _____

Date _____

Add a Ten and Some Ones

1.	$10 + 1 = \underline{\quad}$	16.	$3 + 10 = \underline{\quad}$
2.	$10 + 2 = \underline{\quad}$	17.	$4 + 10 = \underline{\quad}$
3.	$10 + 4 = \underline{\quad}$	18.	$1 + 10 = \underline{\quad}$
4.	$10 + 3 = \underline{\quad}$	19.	$2 + 10 = \underline{\quad}$
5.	$10 + 5 = \underline{\quad}$	20.	$5 + 10 = \underline{\quad}$
6.	$10 + 6 = \underline{\quad}$	21.	$\underline{\quad} = 10 + 5$
7.	$\underline{\quad} = 10 + 1$	22.	$\underline{\quad} = 10 + 8$
8.	$\underline{\quad} = 10 + 4$	23.	$\underline{\quad} = 10 + 9$
9.	$\underline{\quad} = 10 + 3$	24.	$\underline{\quad} = 10 + 6$
10.	$\underline{\quad} = 10 + 5$	25.	$\underline{\quad} = 10 + 7$
11.	$\underline{\quad} = 10 + 2$	26.	$16 = \underline{\quad} + 6$
12.	$10 + 6 = \underline{\quad}$	27.	$8 + \underline{\quad} = 18$
13.	$10 + 9 = \underline{\quad}$	28.	$\underline{\quad} + 10 = 17$
14.	$10 + 7 = \underline{\quad}$	29.	$19 = \underline{\quad} + 10$
15.	$10 + 8 = \underline{\quad}$	30.	$18 = 8 + \underline{\quad}$

BImprovement: _____ Number Correct: 


Name _____

Date _____

Add a Ten and Some Ones

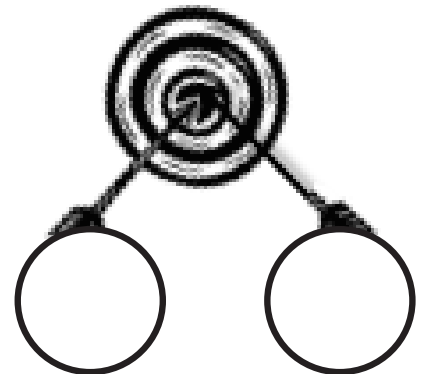
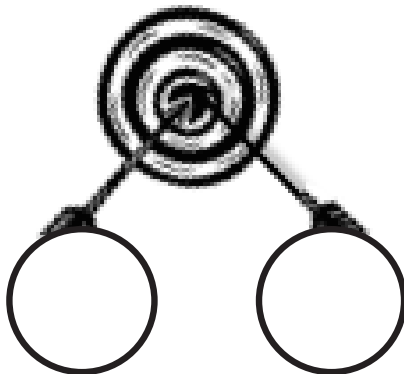
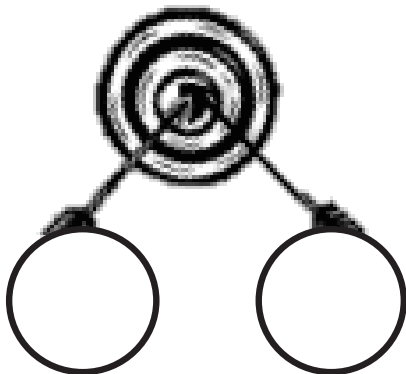
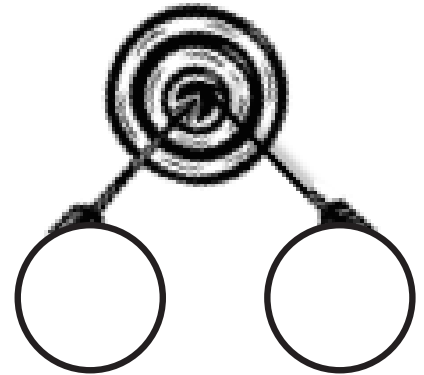
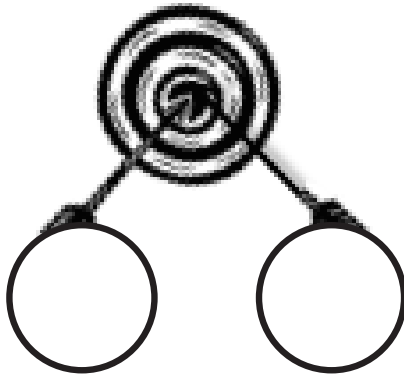
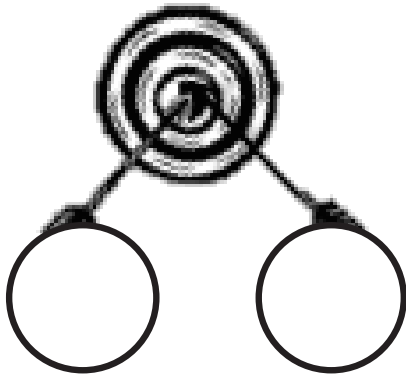
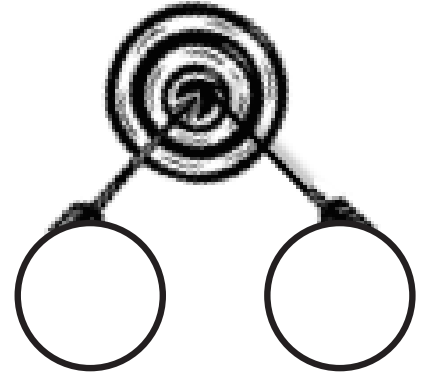
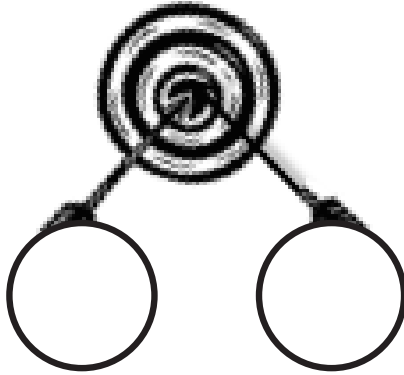
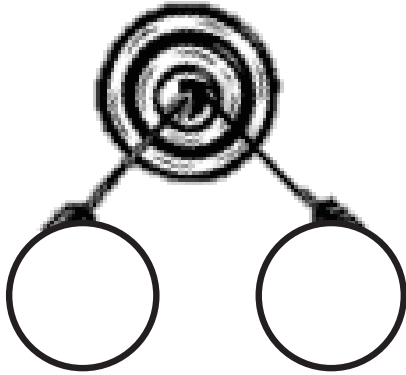
1.	$10 + 5 = \underline{\quad}$	16.	$4 + 10 = \underline{\quad}$
2.	$10 + 4 = \underline{\quad}$	17.	$3 + 10 = \underline{\quad}$
3.	$10 + 3 = \underline{\quad}$	18.	$2 + 10 = \underline{\quad}$
4.	$10 + 2 = \underline{\quad}$	19.	$1 + 10 = \underline{\quad}$
5.	$10 + 1 = \underline{\quad}$	20.	$3 + 10 = \underline{\quad}$
6.	$10 + 5 = \underline{\quad}$	21.	$\underline{\quad} = 10 + 6$
7.	$\underline{\quad} = 10 + 4$	22.	$\underline{\quad} = 10 + 9$
8.	$\underline{\quad} = 10 + 2$	23.	$\underline{\quad} = 10 + 5$
9.	$\underline{\quad} = 10 + 1$	24.	$\underline{\quad} = 10 + 7$
10.	$\underline{\quad} = 10 + 3$	25.	$\underline{\quad} = 10 + 8$
11.	$\underline{\quad} = 10 + 4$	26.	$17 = \underline{\quad} + 7$
12.	$10 + 6 = \underline{\quad}$	27.	$3 + \underline{\quad} = 13$
13.	$10 + 7 = \underline{\quad}$	28.	$\underline{\quad} + 10 = 16$
14.	$10 + 9 = \underline{\quad}$	29.	$18 = \underline{\quad} + 10$
15.	$10 + 8 = \underline{\quad}$	30.	$17 = 7 + \underline{\quad}$

Target Number:



Target Practice


Choose a *target number*, and write it in the middle of the circle on the top of the page. Roll a die. Write the number rolled in the circle at the end of one of the arrows. Then, make a bull's eye by writing the number needed to make your target in the other circle.



target practice

A

Number Correct:




Name _____

Date _____

Add Tens and Ones

1.	$10 + 3 = \underline{\quad}$	16.	$10 + \underline{\quad} = 13$
2.	$20 + 2 = \underline{\quad}$	17.	$40 + \underline{\quad} = 42$
3.	$30 + 4 = \underline{\quad}$	18.	$60 + \underline{\quad} = 61$
4.	$50 + 3 = \underline{\quad}$	19.	$70 + \underline{\quad} = 75$
5.	$20 + 5 = \underline{\quad}$	20.	$80 + \underline{\quad} = 83$
6.	$50 + 5 = \underline{\quad}$	21.	$60 + 9 = \underline{\quad}$
7.	$\underline{\quad} = 40 + 1$	22.	$80 + 9 = \underline{\quad}$
8.	$\underline{\quad} = 20 + 4$	23.	$80 + \underline{\quad} = 86$
9.	$\underline{\quad} = 20 + 3$	24.	$90 + \underline{\quad} = 97$
10.	$\underline{\quad} = 30 + 5$	25.	$\underline{\quad} + 6 = 76$
11.	$\underline{\quad} = 40 + 5$	26.	$\underline{\quad} + 6 = 86$
12.	$30 + 6 = \underline{\quad}$	27.	$86 = \underline{\quad} + 6$
13.	$20 + 9 = \underline{\quad}$	28.	$\underline{\quad} + 60 = 67$
14.	$40 + 7 = \underline{\quad}$	29.	$95 = \underline{\quad} + 90$
15.	$50 + 8 = \underline{\quad}$	30.	$97 = 7 + \underline{\quad}$

**B**

Improvement: _____

Number Correct: _____

Name _____

Date _____

Add Tens and Ones

1.	$10 + 2 = \underline{\quad}$	16.	$10 + \underline{\quad} = 12$
2.	$20 + 3 = \underline{\quad}$	17.	$40 + \underline{\quad} = 42$
3.	$30 + 4 = \underline{\quad}$	18.	$60 + \underline{\quad} = 61$
4.	$50 + 4 = \underline{\quad}$	19.	$70 + \underline{\quad} = 75$
5.	$40 + 5 = \underline{\quad}$	20.	$80 + \underline{\quad} = 83$
6.	$50 + 1 = \underline{\quad}$	21.	$70 + 8 = \underline{\quad}$
7.	$\underline{\quad} = 50 + 1$	22.	$80 + 8 = \underline{\quad}$
8.	$\underline{\quad} = 20 + 4$	23.	$70 + \underline{\quad} = 76$
9.	$\underline{\quad} = 20 + 2$	24.	$90 + \underline{\quad} = 99$
10.	$\underline{\quad} = 30 + 5$	25.	$\underline{\quad} + 8 = 78$
11.	$\underline{\quad} = 40 + 3$	26.	$\underline{\quad} + 6 = 96$
12.	$30 + 7 = \underline{\quad}$	27.	$86 = \underline{\quad} + 6$
13.	$20 + 8 = \underline{\quad}$	28.	$\underline{\quad} + 60 = 67$
14.	$40 + 9 = \underline{\quad}$	29.	$95 = \underline{\quad} + 90$
15.	$50 + 6 = \underline{\quad}$	30.	$97 = 7 + \underline{\quad}$

ANumber Correct: 

Name _____


Date _____

*Write the missing number. Pay attention to the + and - signs.

1.	$3 + 1 = \underline{\quad}$	16.	$6 + 2 = \underline{\quad}$
2.	$13 + 1 = \underline{\quad}$	17.	$56 + 2 = \underline{\quad}$
3.	$23 + 1 = \underline{\quad}$	18.	$7 + 2 = \underline{\quad}$
4.	$1 + 2 = \underline{\quad}$	19.	$67 + 2 = \underline{\quad}$
5.	$11 + 2 = \underline{\quad}$	20.	$87 + 2 = \underline{\quad}$
6.	$21 + 2 = \underline{\quad}$	21.	$7 - 2 = \underline{\quad}$
7.	$31 + 2 = \underline{\quad}$	22.	$47 - 2 = \underline{\quad}$
8.	$61 + 2 = \underline{\quad}$	23.	$67 - 2 = \underline{\quad}$
9.	$4 - 1 = \underline{\quad}$	24.	$26 + 3 = \underline{\quad}$
10.	$14 - 1 = \underline{\quad}$	25.	$56 + \underline{\quad} = 59$
11.	$24 - 1 = \underline{\quad}$	26.	$\underline{\quad} + 3 = 76$
12.	$54 - 1 = \underline{\quad}$	27.	$57 - \underline{\quad} = 54$
13.	$5 - 3 = \underline{\quad}$	28.	$77 - \underline{\quad} = 74$
14.	$15 - 3 = \underline{\quad}$	29.	$\underline{\quad} - 4 = 73$
15.	$25 - 3 = \underline{\quad}$	30.	$\underline{\quad} - 4 = 93$

B

Number Correct:



Name _____

Date _____

*Write the missing number. Pay attention to the + and - signs.

1.	$2 + 1 = \underline{\quad}$	16.	$7 + 2 = \underline{\quad}$
2.	$12 + 1 = \underline{\quad}$	17.	$67 + 2 = \underline{\quad}$
3.	$22 + 1 = \underline{\quad}$	18.	$4 + 5 = \underline{\quad}$
4.	$3 + 2 = \underline{\quad}$	19.	$54 + 5 = \underline{\quad}$
5.	$13 + 2 = \underline{\quad}$	20.	$84 + 5 = \underline{\quad}$
6.	$23 + 2 = \underline{\quad}$	21.	$8 - 6 = \underline{\quad}$
7.	$43 + 2 = \underline{\quad}$	22.	$48 - 6 = \underline{\quad}$
8.	$63 + 2 = \underline{\quad}$	23.	$78 - 6 = \underline{\quad}$
9.	$5 - 1 = \underline{\quad}$	24.	$33 + 4 = \underline{\quad}$
10.	$15 - 1 = \underline{\quad}$	25.	$63 + \underline{\quad} = 67$
11.	$25 - 1 = \underline{\quad}$	26.	$\underline{\quad} + 3 = 77$
12.	$45 - 1 = \underline{\quad}$	27.	$59 - \underline{\quad} = 56$
13.	$5 - 4 = \underline{\quad}$	28.	$79 - \underline{\quad} = 76$
14.	$15 - 4 = \underline{\quad}$	29.	$\underline{\quad} - 6 = 73$
15.	$25 - 4 = \underline{\quad}$	30.	$\underline{\quad} - 6 = 93$

Exit Ticket Packet

Name _____

Date _____

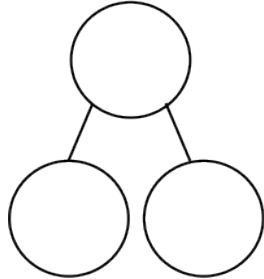
1. Add or subtract. Complete the number bond to match.

a. $9 + 1 = \underline{\quad}$

$1 + 9 = \underline{\quad}$

$10 - 1 = \underline{\quad}$

$10 - 9 = \underline{\quad}$

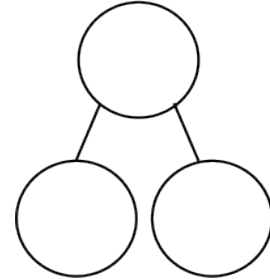


b. $4 + 6 = \underline{\quad}$

$6 + 4 = \underline{\quad}$

$10 - 6 = \underline{\quad}$

$10 - 4 = \underline{\quad}$



2. Solve.

a. $10 + 5 = \underline{\quad}$

b. $13 = 10 + \underline{\quad}$

c. $10 + 8 = \underline{\quad}$

Name _____

Date _____

Solve.

1.

a. $10 + 3 = \underline{\quad}$

b. $30 + 4 = \underline{\quad}$

c. $60 + 5 = \underline{\quad}$

d. $90 + 1 = \underline{\quad}$

2.

a. $\underline{\quad} = 10 + 7$

b. $\underline{\quad} = 20 + 9$

c. $\underline{\quad} = 70 + 6$

d. $\underline{\quad} = 90 + 8$

Name _____

Date _____

Solve.

1. $23 + 5 = \underline{\quad}$

2. $68 - 5 = \underline{\quad}$

3. $43 + 30 = \underline{\quad}$

4. $76 - 60 = \underline{\quad}$

Name _____

Date _____

Solve.

1. $9 + 6 = \underline{\quad}$

2. $8 + 5 = \underline{\quad}$

Name _____

Date _____

Solve.

a. $39 + 4 = \underline{\quad}$

b. $58 + 7 = \underline{\quad}$

Name _____

Date _____

Solve.

1. $70 - 4 = \underline{\quad}$

2. $60 - 3 = \underline{\quad}$

Name _____

Date _____

Solve.

1.

$15 - 7 = \underline{\quad}$

2.

$14 - 6 = \underline{\quad}$

Name _____

Date _____

Solve.

1. $21 - 9 = \underline{\quad}$	2. $34 - 8 = \underline{\quad}$	3. $82 - 7 = \underline{\quad}$
------------------------------------	------------------------------------	------------------------------------

Assessment Packet

Name _____

Date _____

1. Solve.

a. $18 + 4 = \underline{\quad}$	b. $48 - 6 = \underline{\quad}$
c. $15 - 8 = \underline{\quad}$	d. $8 + 65 = \underline{\quad}$
e. $66 + 30 = \underline{\quad}$	f. $83 - 9 = \underline{\quad}$

2. Write a number sentence and statement to answer the sticker questions below. Include a math drawing if you like.

a. Trevor's mom gave him 6 stickers to start his collection. He received 25 more for his birthday. How many stickers does Trevor have now?

b. James has 40 stickers and gives away 7. How many stickers does James have now?

3. Solve.

a. $13 - 7 = \underline{\quad}$	b. $29 + 6 = \underline{\quad}$
c. $42 + 5 = \underline{\quad}$	d. $36 + 60 = \underline{\quad}$
e. $80 - 8 = \underline{\quad}$	f. $85 - 60 = \underline{\quad}$

4. Tammy gave 7 markers to Sam. She started with 42 markers. How many markers does Tammy have now? Write a number sentence and statement to answer. Include a math drawing if you like.